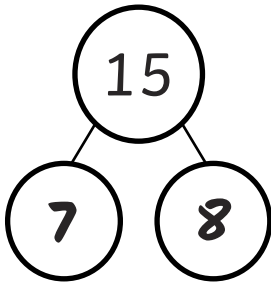
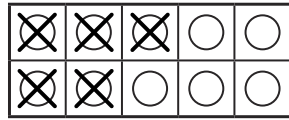
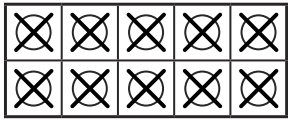


$$20 - 15 = 5$$



$$15 - 7 = 8$$

$15 - 9 = 6$ Zack ate 6 more grapes than Hardeep.

Chen is seven years old. Jian is nine years old.



12 and 7 have a difference of 5.

Children could use a number line or towers of cubes to prove this is true.



$14 - 6 = 8$ Ali has 8 sweets.

