

Name:

Date:




5
total marks




Maths Quiz - 6

1. 2, 4, 6, 8, ,

2.

3.   

4. 

5.

1 mark

1 mark

1 mark

1 mark

1 mark

Total for this page

question	answer	marks	notes
1. Complete the following number sequence: 2, 4, 6, 8, _____, _____			
1	10, 12	1	National Curriculum Objective: Count in multiples of twos, fives and tens (Year 1)
2. Put a ring around the number that is one less than 12.			
2	11	1	National Curriculum Objective: Given a number, identify one more and one less (Year 1)
3. On your sheet you can see three shapes. Put a ring around the shape with three sides.			
3	Ring around the triangle	1	National Curriculum Objective: Recognise and name common 2D shapes for example, rectangles (including squares), circles and triangles (Year 1)
4. I would like 10 beads. I have already drawn some. Can you add some more to give me a total of 10?			
4	3 more beads added	1	National Curriculum Objective: Represent and use number bonds and related subtraction facts within 20 (Year 1)
5. Write the number 19.			
5	19 In order for the answer to be correct the child must have the tens and ones in the correct place. The numbers 1 and 9 may be reversed.	1	National Curriculum Objective: Count, read and write numbers to 100 in numerals (Year 1)
total		5	