

Name:

Date:





5
total marks





Maths Quiz - 9

1. 20, 19, 18, ,

2.

3.    

4. 

5. 

1 mark


1 mark

1 mark

1 mark

1 mark

Total for this page

question	answer	marks	notes
1. Complete the following number sequence: 20, 19, 18, 17, _____, _____			
1	17, 16	1	National Curriculum Objective: Count to and across 100, forwards and backwards, beginning with 0 or 1, or from any given number (Year 1)
2. Put a ring around the number that is one more than 17			
2	18	1	National Curriculum Objective: Given a number, identify one more and one less (Year 1)
3. On your sheet you can see four shapes. Put a ring around all of the shapes with four corners.			
3	Ring the square and rectangle.	1	National Curriculum Objective: Recognise and name common 2D shapes for example, rectangles (including squares), circles and triangles (Year 1)
4. I would like 10 beads. I already have some. Can you take some away (cross some out) to give me a total of 10?			
4	7 crossed out.	1	National Curriculum Objective: Represent and use number bonds and related subtraction facts within 20 (Year 1)
5. Colour in one half ($\frac{1}{2}$) of this shape.			
5		1	National Curriculum Objective: Recognise, find and name a quarter as one of four equal parts of an object, shape or quantity (Year 1)
total		5	