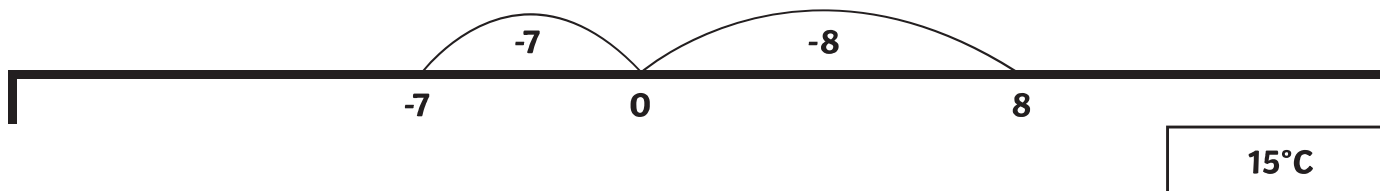


Word Problems Involving Negative Numbers Answers

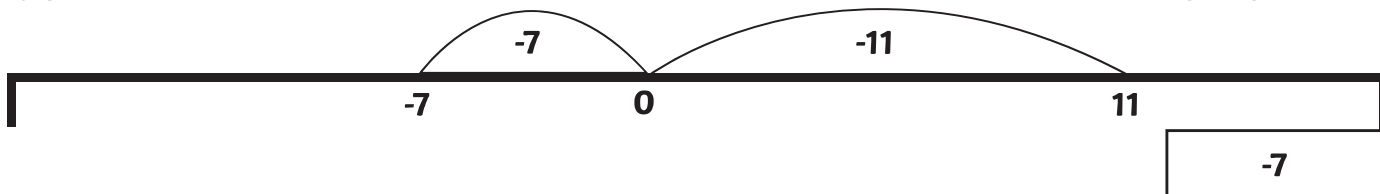
I can solve word problems involving negative numbers

Answer these questions. Adding numbers to the blank number lines may help you.

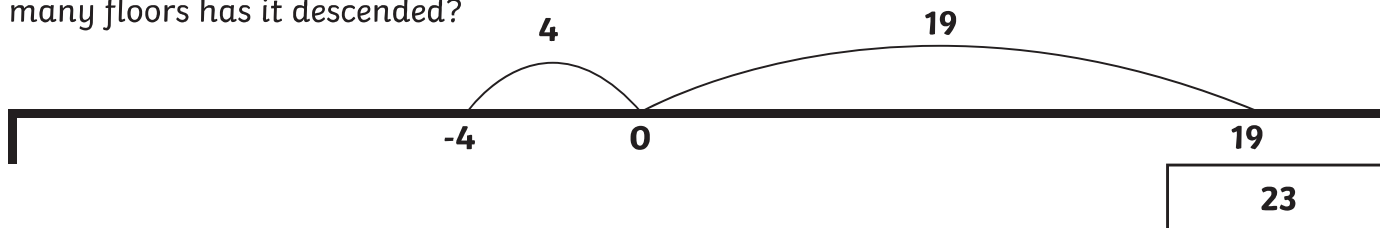
1. The temperature at 6 p.m is 8°C , at 6 a.m. the next morning the temperature has dropped to -7°C . How many degrees has the temperature fallen by?



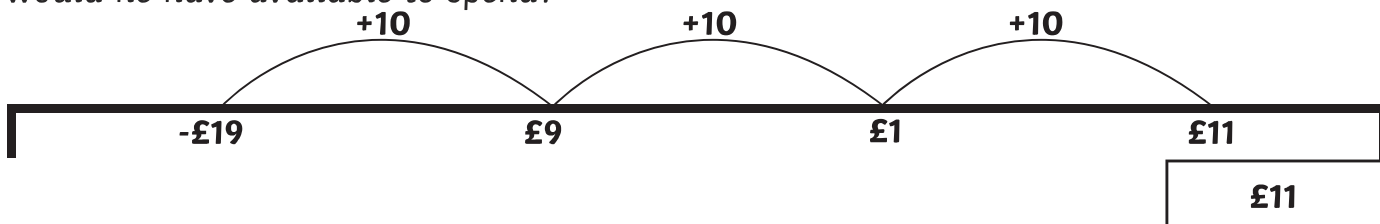
2. If you point to 11 on a number line and then count back 18, which number do you get to?



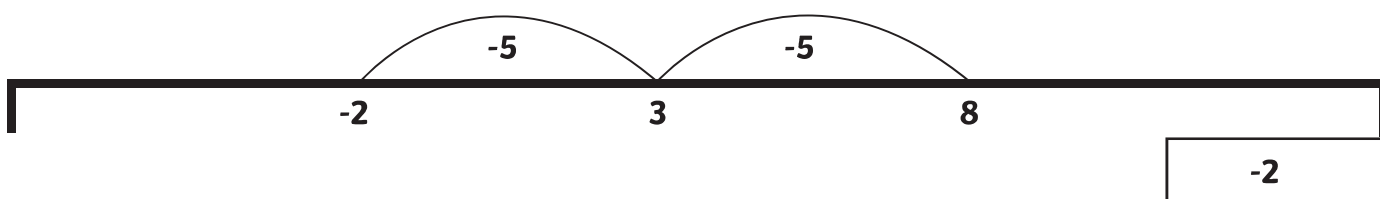
3. The elevator in a skyscraper travels from floor 19 to the underground car park on level -4. How many floors has it descended?



4. An overdraft is a facility which means you can have a negative amount of money in your bank account. If a saver balance of $-\text{£}19$ and then paid $\text{£}30$ into his bank account, how much would he have available to spend?



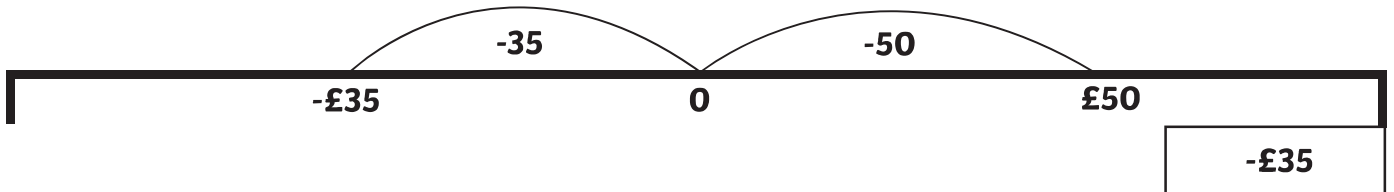
5. In a quiz, a team scores 2 points for each correct answer and loses 5 points for each wrong answer. From the start of a game, a team gets 4 questions in a row correct, but then gets two questions wrong. How many points do they have?



6. The temperature in New York is 4°C when the Christmas lights are switched on. By 9 a.m. the next day, the temperature has fallen by 11°C . What is the new temperature?



7. Mrs. Jones buys a pair of skis and pays for them with her debit card. The skis cost $\pounds 85$ and she had $\pounds 50$ in her account. What is her new balance?



8. Mr. Davies overspends during the month of September and goes $\pounds 247$ overdrawn. How much does he have left after his October wages of $\pounds 847$ are paid into his account?

